



Ejercicios



Razonamiento Abstracto

Preguntas modelo
examen de acceso a la educación superior



ACCESO a la Educación Superior
SENESCYT

QUIERO SER MAESTRO
Ministerio de Educación

ACCESO A LA EDUCACIÓN SUPERIOR TAE100_001

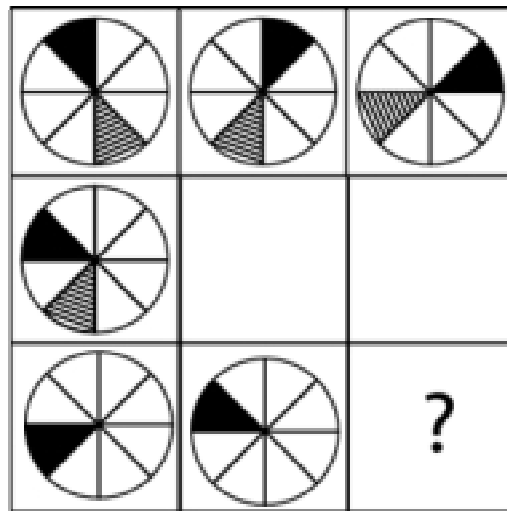
Opción Múltiple

Elige la opción que complete mejor el enunciado o que responda mejor a la pregunta.

www.riollearning.com

1.


¿Cuál es la figura que falta?



- A.
- B.
- C.
- D.
- E.

2.

¿Cuál es la figura que falta?

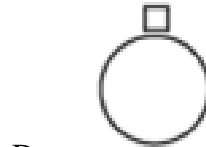
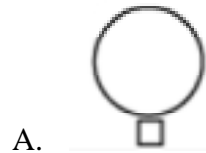
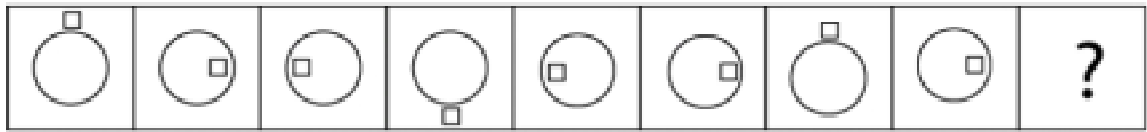


- A. ● ○ ○
- B. ● ○
- C. ● ●
- D.
- E. ●



3.

¿Cuál es la figura que falta?



4.

¿Cuál es la figura que falta?

		?


A.



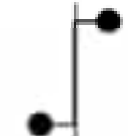
B.



C.



D.



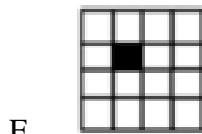
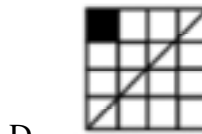
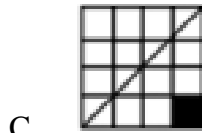
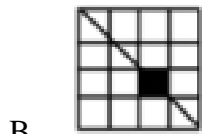
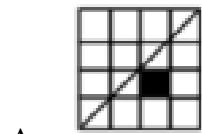
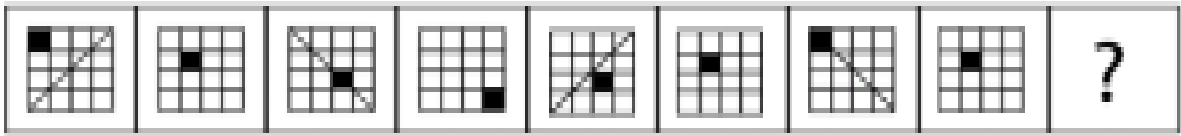
E.





5.

¿Cuál es la figura que falta?




www.riollearning.com






6. ¿Cuál es la figura que falta?

- A.
- B.
- C.
- D.
- E.

www.riollearning.com

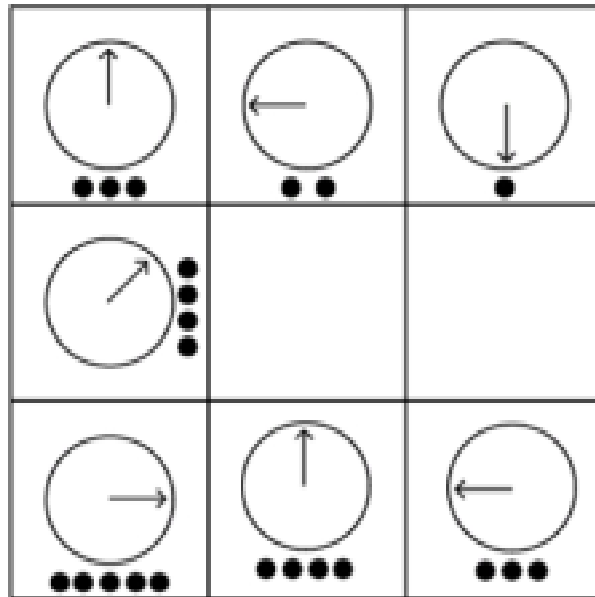
7. ¿Cuál es la figura que falta?



- A. 
- B. 
- C. 
- D. 
- E. 

8.


¿Cuál es la figura que falta?



- A.
- B.
- C.
- D.
- E.

9.

¿Cuál es la figura que falta?



A.



B.



C.



D.



E.



www.riollearning.com

10. ¿Cuál es la figura que falta?

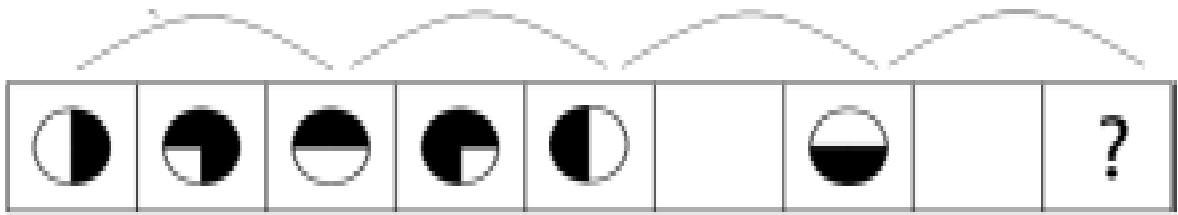
		?

- A.
- B.
- C.
- D.
- E.

www.riollearning.com

11.

¿Cuál es la figura que falta?



A.



B.



C.



D.



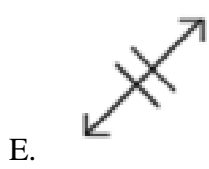
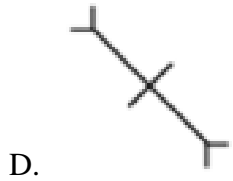
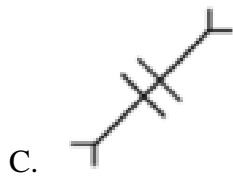
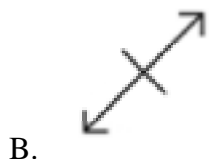
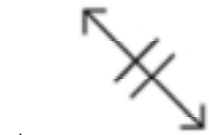
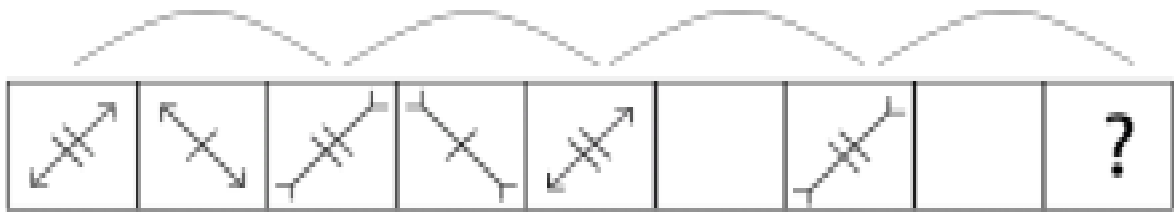
E.





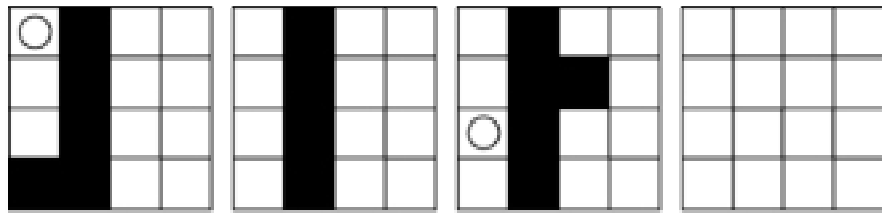
12.

¿Cuál es la figura que falta?

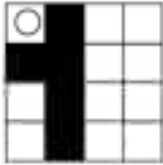


13.

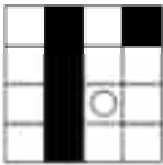
¿Cuál es la figura que falta?



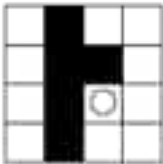
A.




B.



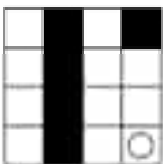
C.



D.



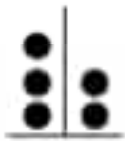
E.



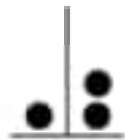
14.

¿Cuál es la figura que falta?

A.




B.



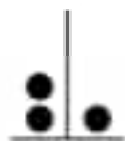
C.



D.





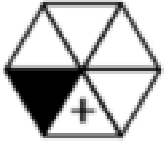


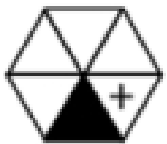
E.



15.

¿Cuál es la figura que falta?



- A. 
- B. 
- C. 
- D. 
- E. 

www.riollearning.com

16.

¿Cuál es la figura que falta?

- A.
- B.
- C.
- D.
- E.

17.

¿Cuál es la figura que falta?

		?

A.



B.




C.



D.



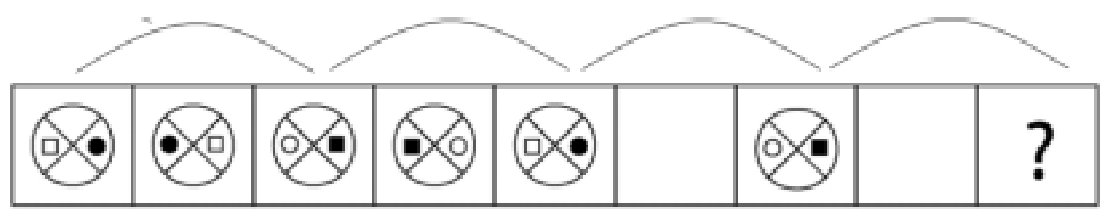
E.



www.riollearning.com

18.

¿Cuál es la figura que falta?

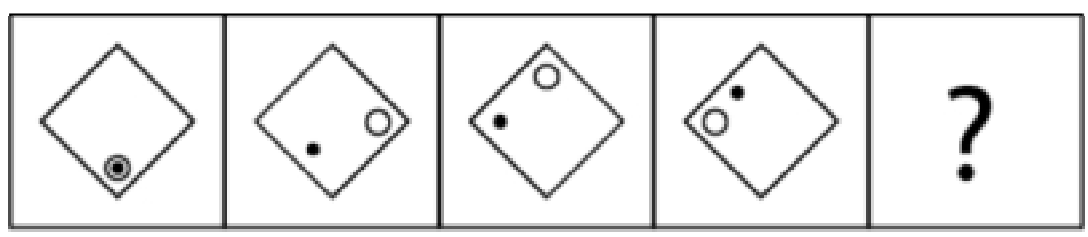


- A.
- B.
- C.
- D.
- E.

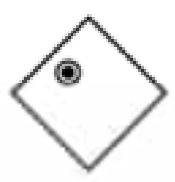
www.riollearning.com

19.

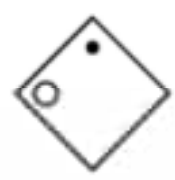
¿Cuál es la figura que falta?



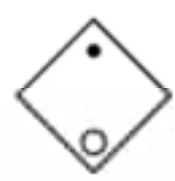
A.



B.



C.



D.

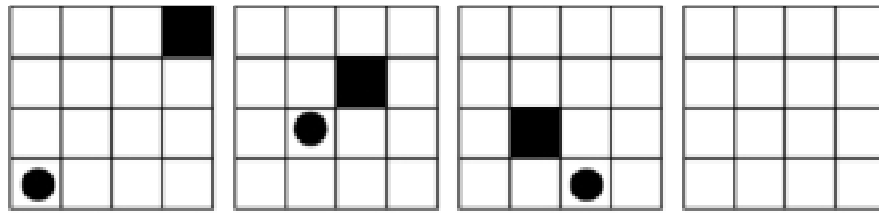


E.



20.

¿Cuál es la figura que falta?




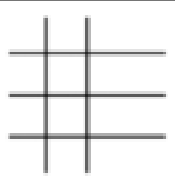

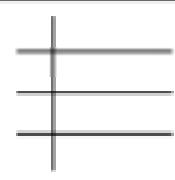







- A.
- B.
- C.
- D.
- E.



21.

¿Cuál es la figura que falta?


		
		
		?




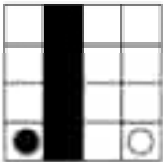

- A. 
- B. 
- C. 
- D. 
- E. 



22.


¿Cuál es la figura que falta?








- A. 
- B. 
- C. 
- D. 
- E. 

23.

¿Cuál es la figura que falta?

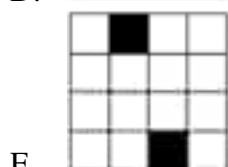
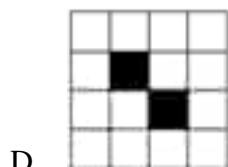

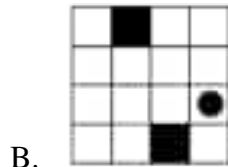

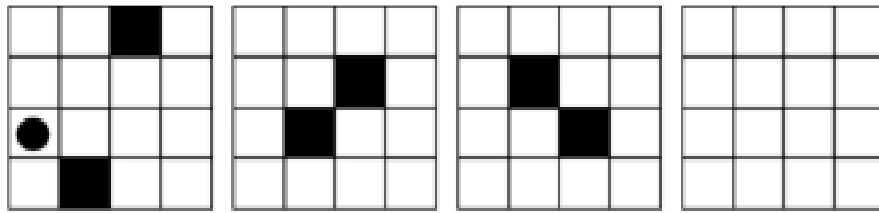


- A. 
- B. 
- C. 
- D. 
- E. 



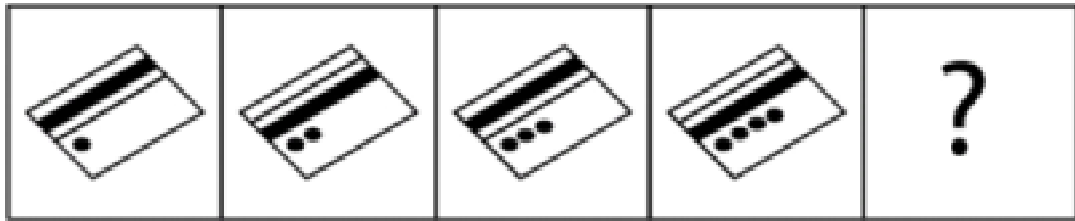
24.

¿Cuál es la figura que falta?



25.

¿Cuál es la figura que falta?



A.



B.



C.



D.











E.



26.

¿Cuál es la figura que falta?

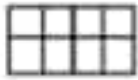
A.



B.



C.



D.

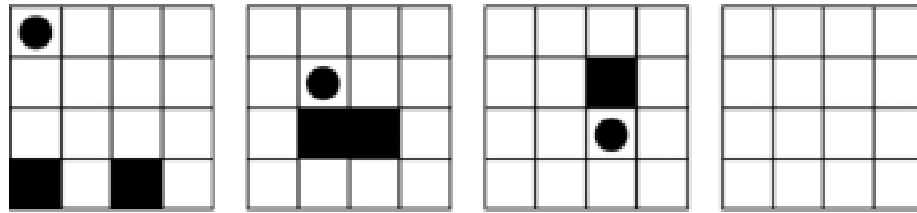


E.




27.


¿Cuál es la figura que falta?




A.



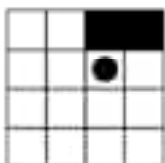
B.



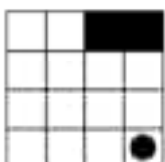
C.



D.




E.



28.

¿Cuál es la figura que falta?



A.




B.



C.



D.




E.




29.

¿Cuál es la figura que falta?



A.



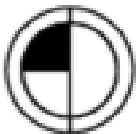
B.



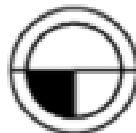
C.



D.




E.



www.riollearning.com

30.

¿Cuál es la figura que falta?



A.



B.



C.



D.



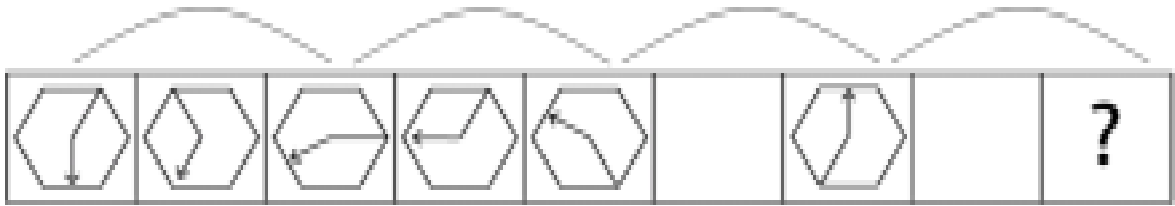
E.



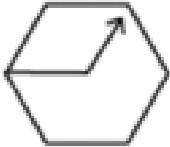


31.

¿Cuál es la figura que falta?



A.



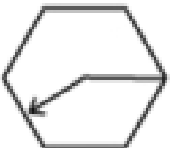
B.



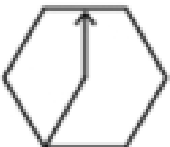
C.



D.

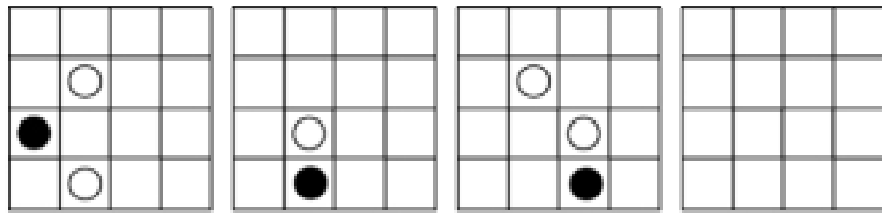


E.

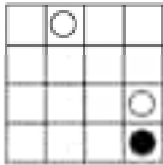


32.

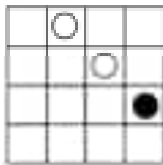
¿Cuál es la figura que falta?



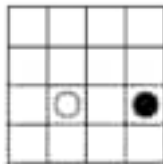
A.




B.



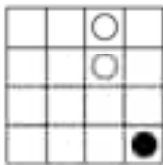
C.



D.

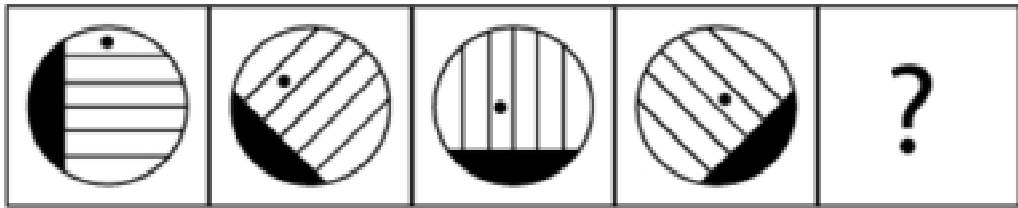


E.



33.

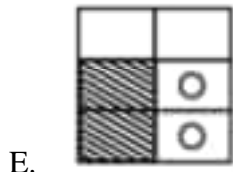
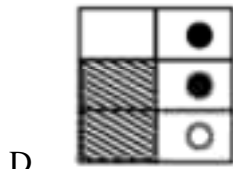
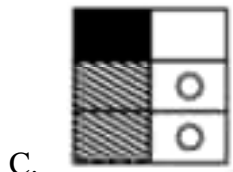
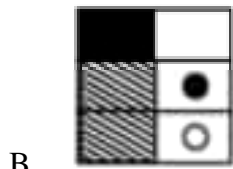
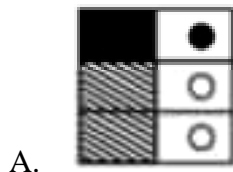
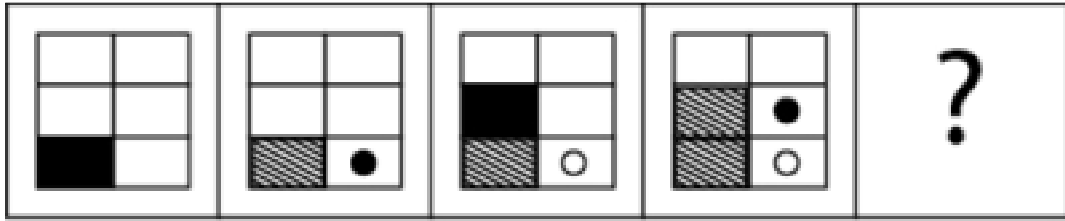
¿Cuál es la figura que falta?



- A.
- B.
- C.
- D.
- E.

34.

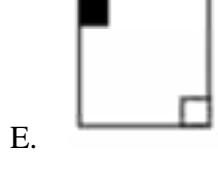
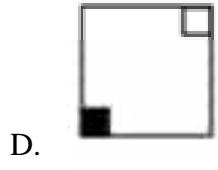
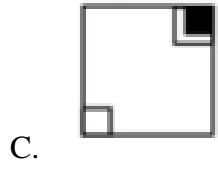
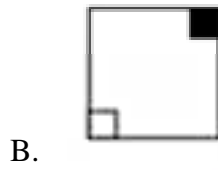
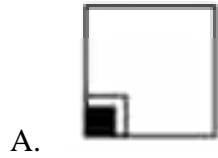
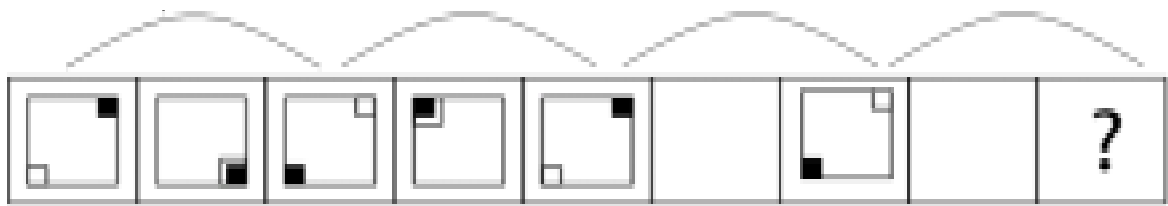
¿Cuál es la figura que falta?



www.riollearning.com

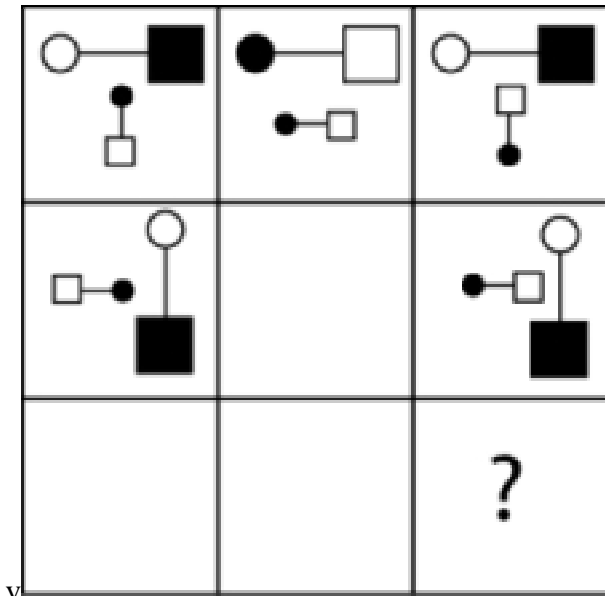
35.

¿Cuál es la figura que falta?



36.

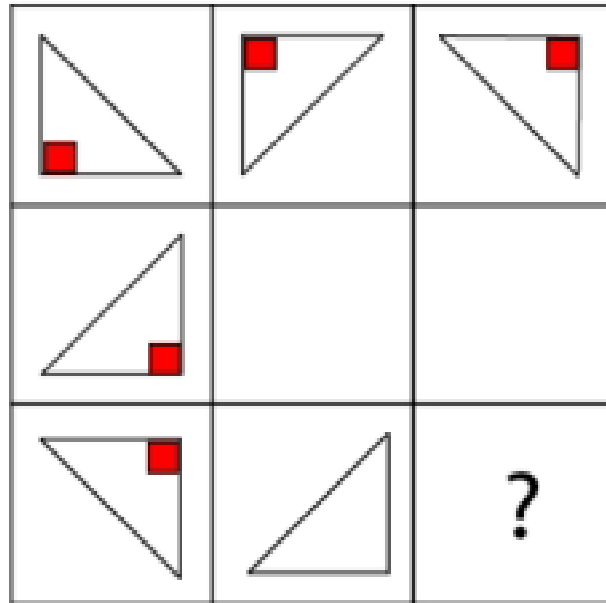
¿Cuál es la figura que falta?

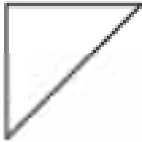
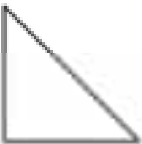
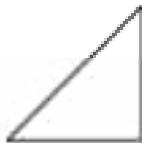




- A.
- B.
- C.
- D.
- E.

37.

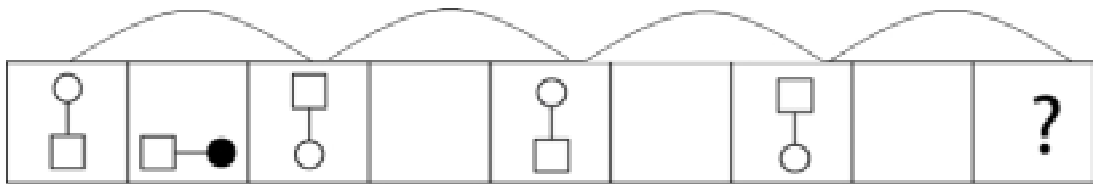
¿Cuál es la figura que falta?



- A. 
- B. 
- C. 
- D. 
- E. 

38.

¿Cuál es la figura que falta?



A.



B.



C.



D.



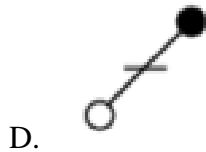
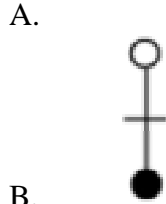
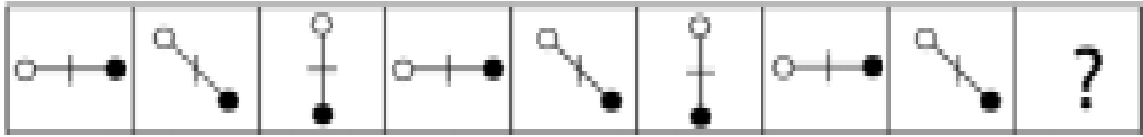
E.






39.

¿Cuál es la figura que falta?

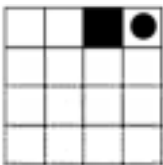


40.


¿Cuál es la figura que falta?




A.



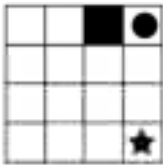
B.




C.



D.

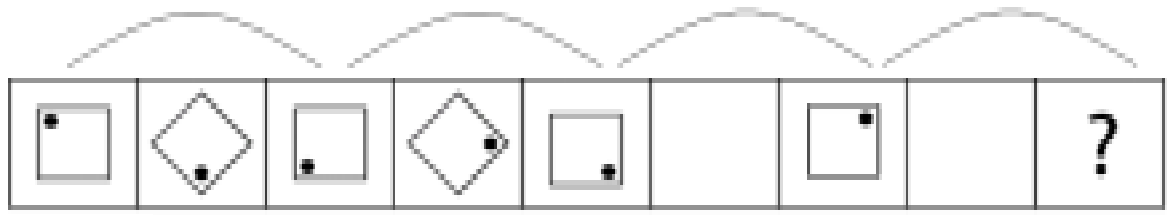


E.




41.


¿Cuál es la figura que falta?



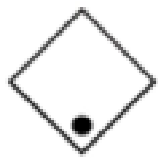
A.



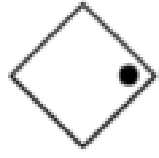
B.




C.



D.

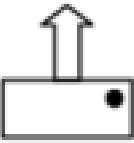

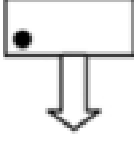
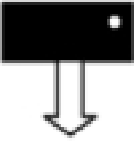
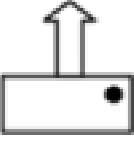



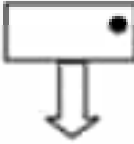
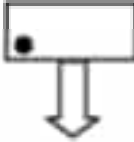
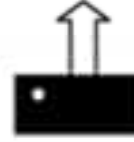

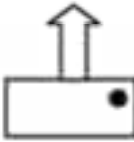
E.



42.


¿Cuál es la figura que falta?

		
		
		?


- A. 
- B. 
- C. 
- D. 
- E. 

43.


¿Cuál es la figura que falta?



A.




B.



C.



D.

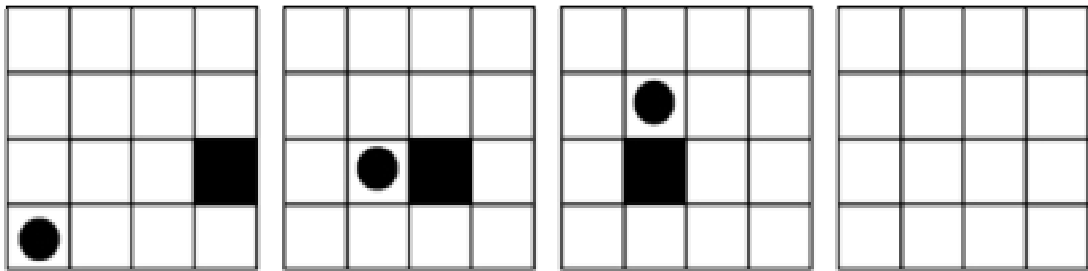


E.

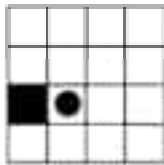


44.

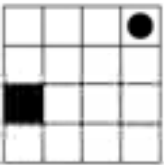
¿Cuál es la figura que falta?



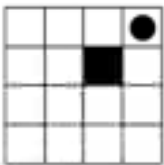
A.




B.



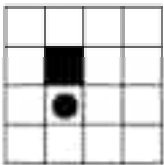
C.



D.

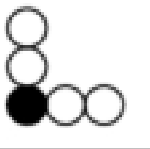
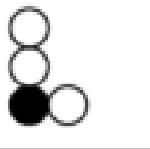
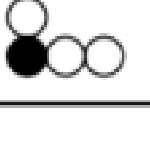









E.



45.

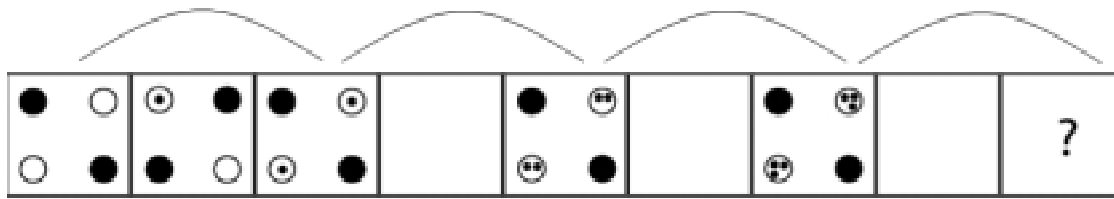
¿Cuál es la figura que falta?

		
		
		?

- A. 
- B. 
- C. 
- D. 
- E. 

46.

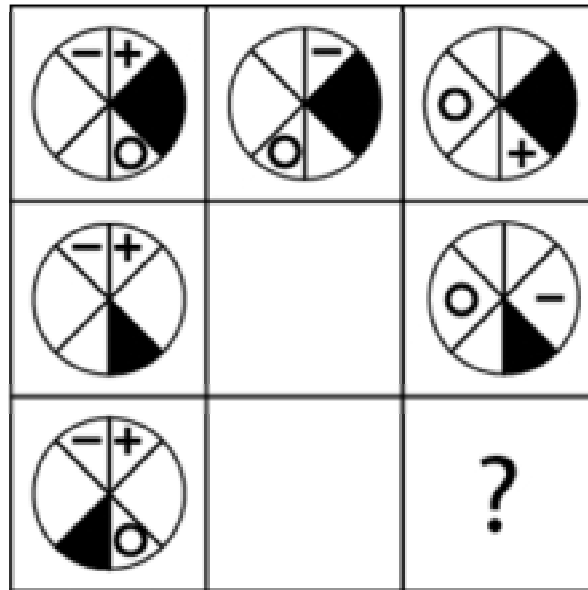
¿Cuál es la figura que falta?



- A.
- B.
- C.
- D.
- E.

47.

¿Cuál es la figura que falta?



A.



B.



C.



D.














E.



48.


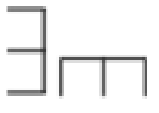





¿Cuál es la figura que falta?






		
		
		?

- A. 
- B. 
- C. 
- D. 
- E. 

49.

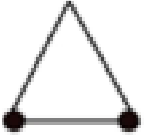
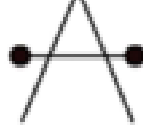
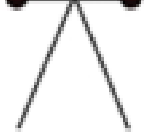
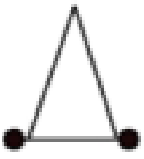
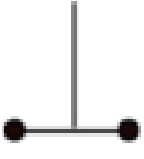
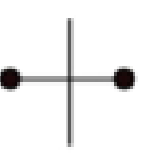
¿Cuál es la figura que falta?

- A. 
- B. 
- C. 
- D. 
- E. 

50.

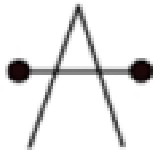
¿Cuál es la figura que falta?

		
		
		?

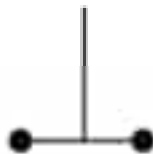
A.



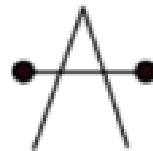
B.



C.



D.









E.



51.

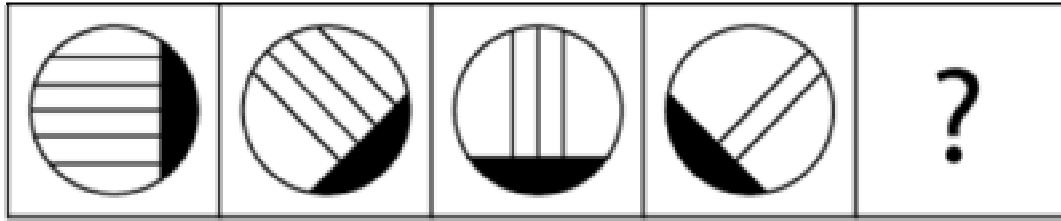
¿Cuál es la figura que falta?



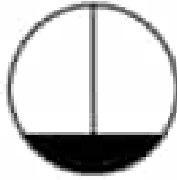




- A. 
- B. 
- C. 
- D. 
- E. 

52.


¿Cuál es la figura que falta?



- A. 
- B. 
- C. 
- D. 
- E. 

53.

¿Cuál es la figura que falta?



A.



B.



C.



D.




E.



54.


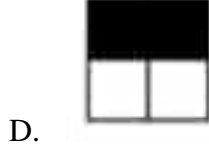
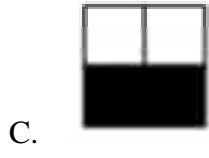
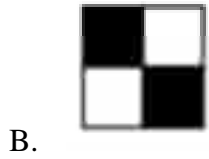

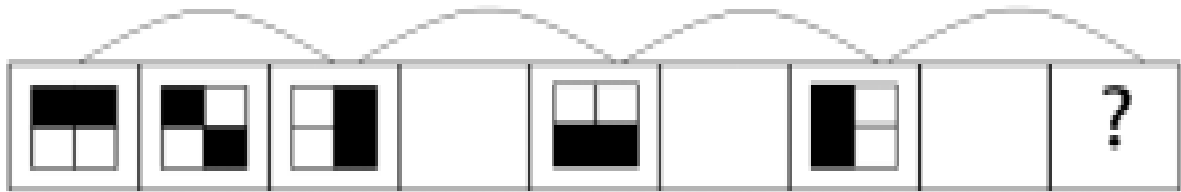
¿Cuál es la figura que falta?



www.riollearning.com

55.







¿Cuál es la figura que falta?








www.riollearning.com

56.

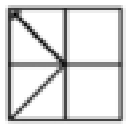
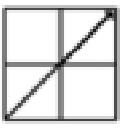

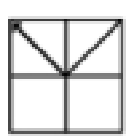
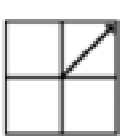
¿Cuál es la figura que falta?

		
		
		?

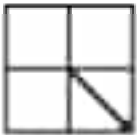
- A. 
- B. 
- C. 
- D. 
- E. 

57.

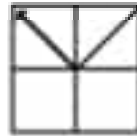
¿Cuál es la figura que falta?

		
		
		?

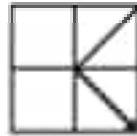
A.



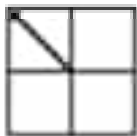
B.



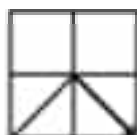
C.



D.



E.



58.

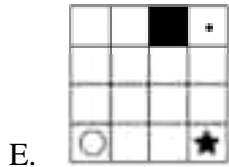
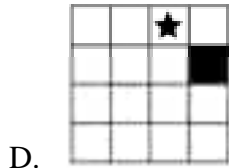
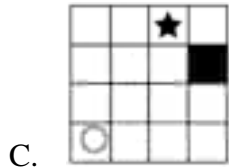
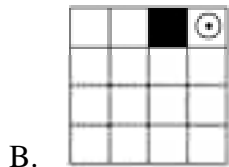
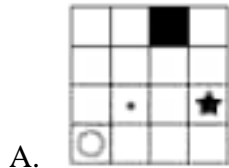
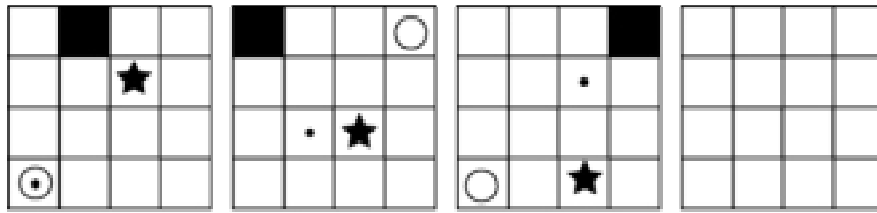
¿Cuál es la figura que falta?

		?

- A.
- B.
- C.
- D.
- E.


59.






¿Cuál es la figura que falta?



60.

¿Cuál es la figura que falta?

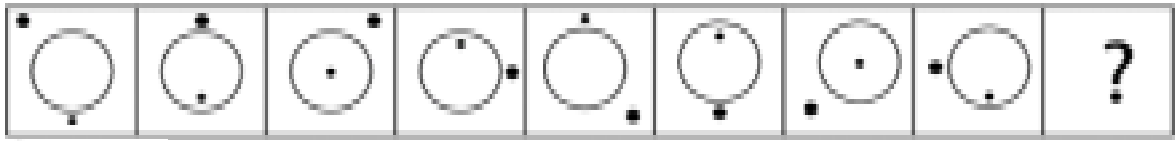


- A. 
- B. 
- C. 
- D. 
- E. 


www.riollearning.com

61.


¿Cuál es la figura que falta?



A.




B.




C.



D.



E.



62.


¿Cuál es la figura que falta?

		?

- A.
- B.
- C.
- D.
- E.

63.


¿Cuál es la figura que falta?




A.



B.



C.



D.




E.



64.

¿Cuál es la figura que falta?






		<p>?</p>








www.riollearning.com

65.

¿Cuál es la figura que falta?

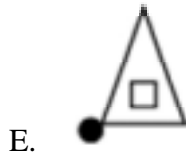
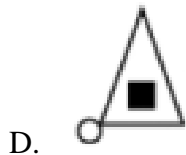
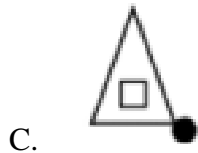
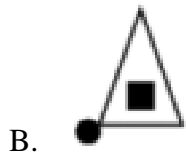
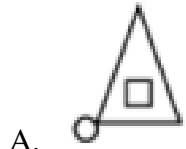
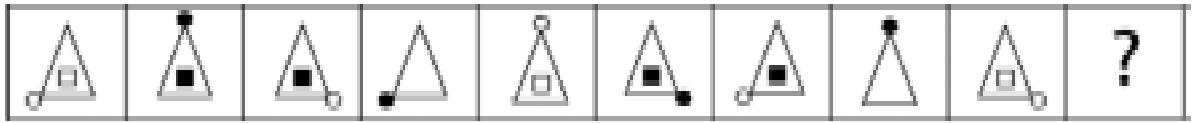
		
		
		?

- A. 
- B. 
- C. 
- D. 
- E. 

www.riollearning.com

66.

¿Cuál es la figura que falta?



67.

¿Cuál es la figura que falta?

		?

- A.
- B.
- C.
- D.
- E.

68.

¿Cuál es la figura que falta?

- A.
- B.
- C.
- D.
- E.

www.riollearning.com

69.

¿Cuál es la figura que falta?







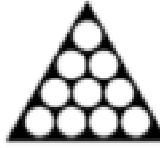

	?	

- A.
- B.
- C.
- D.
- E.

www.riollearning.com

70.


¿Cuál es la figura que falta?

A.



B.



C.



D.

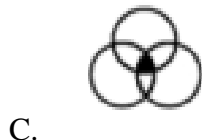
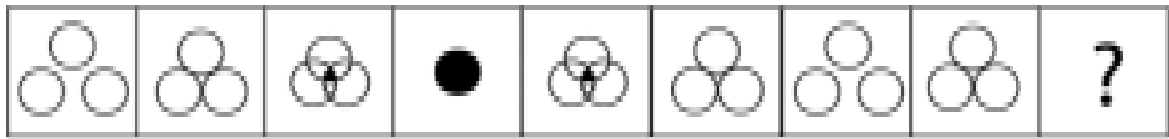


E.



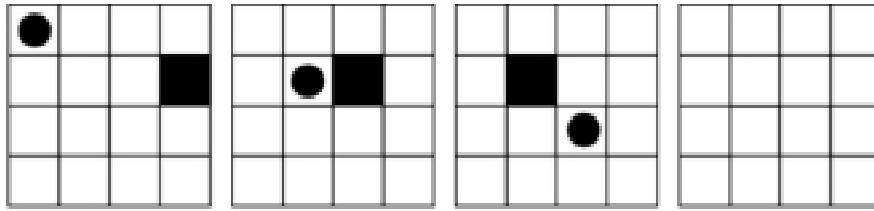
71.

¿Cuál es la figura que falta?

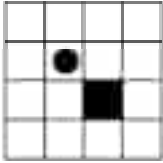


72.


¿Cuál es la figura que falta?




A.




B.




C.



D.



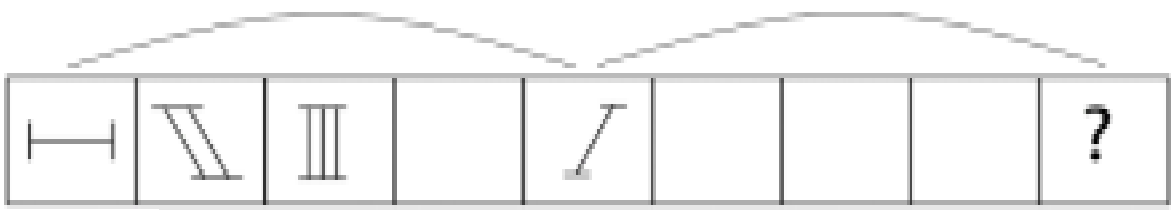
E.



www.riollearning.com

73.





¿Cuál es la figura que falta?



- A.
- B.
- C.
- D.
- E.

74.

¿Cuál es la figura que falta?

		
		
		?

A.



B.



C.



D.



E.



75.

¿Cuál es la figura que falta?

A.




B.



C.



D.

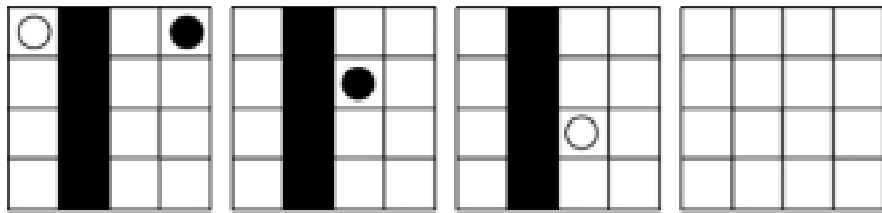


E.

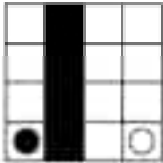


76.

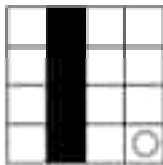
¿Cuál es la figura que falta?



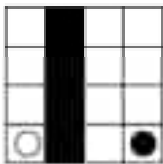
A.



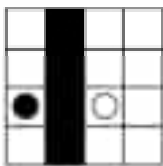
B.




C.



D.

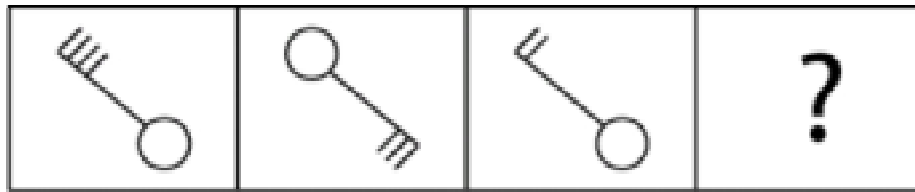


E.



77.

¿Cuál es la figura que falta?



A.



B.



C.



D.



E.



78.

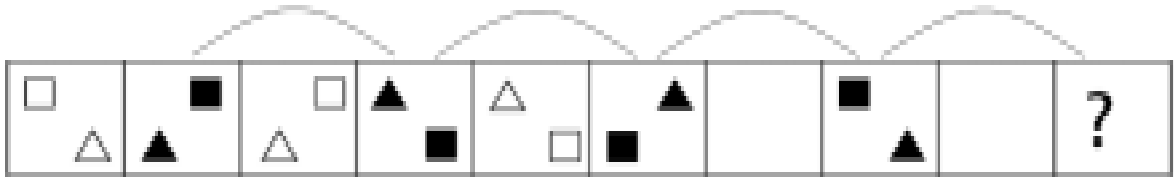
¿Cuál es la figura que falta?



- A.
- B.
- C.
- D.
- E.

79.

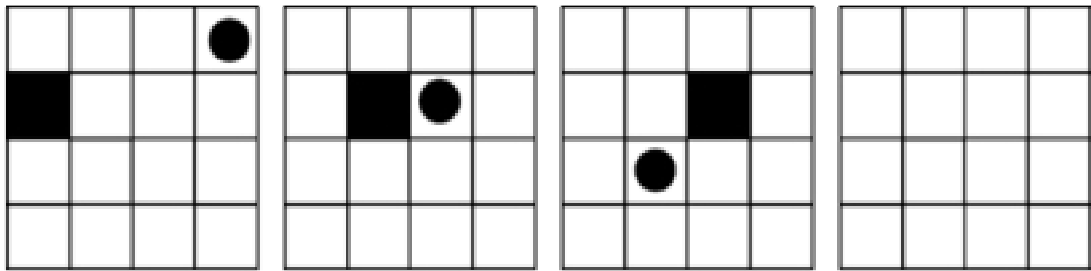
¿Cuál es la figura que falta?








- A.
- B.
- C.
- D.
- E.

80.

¿Cuál es la figura que falta?


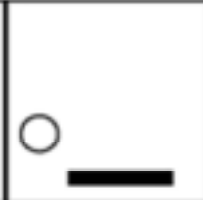




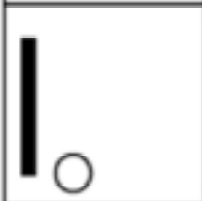
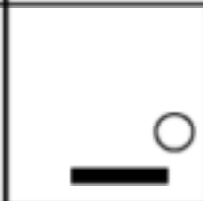



- A. 
- B. 
- C. 
- D. 
- E. 

www.riollearning.com

81.

¿Cuál es la figura que falta?

A.



B.



C.



D.

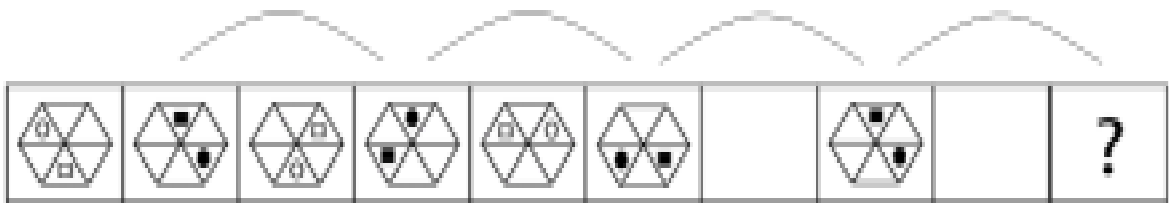


E.

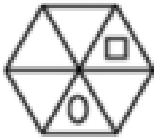
www.riollearning.com

82.

¿Cuál es la figura que falta?



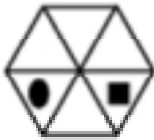
A.



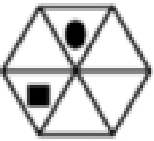
B.



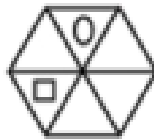
C.



D.




E.

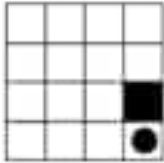


83.

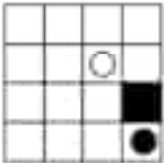
¿Cuál es la figura que falta?



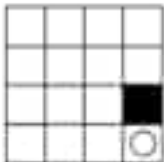
A.



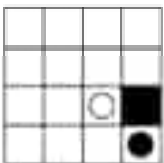
B.



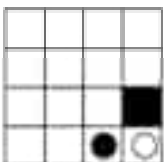
C.



D.



E.



www.riollearning.com

84.


¿Cuál es la figura que falta?

		?

- A.
- B.
- C.
- D.
- E.

85.

¿Cuál es la figura que falta?



A.



B.



C.



D.




E.

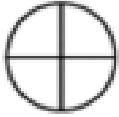


86.

¿Cuál es la figura que falta?



A.



B.



C.



D.



E.



87.

¿Cuál es la figura que falta?

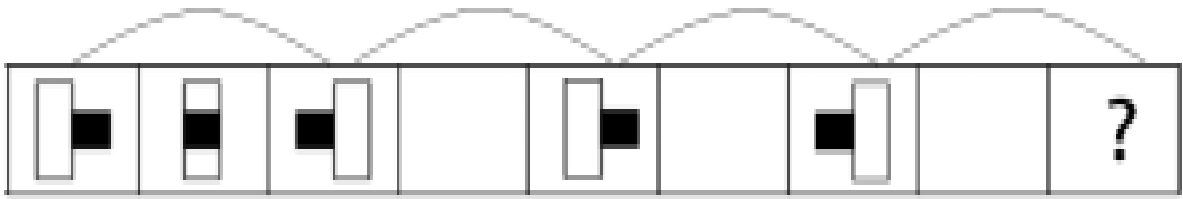
		<p>?</p>



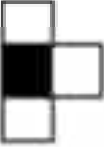

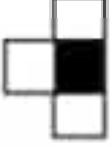
- A.
- B.
- C.
- D.
- E.

www.riollearning.com

88.

¿Cuál es la figura que falta?

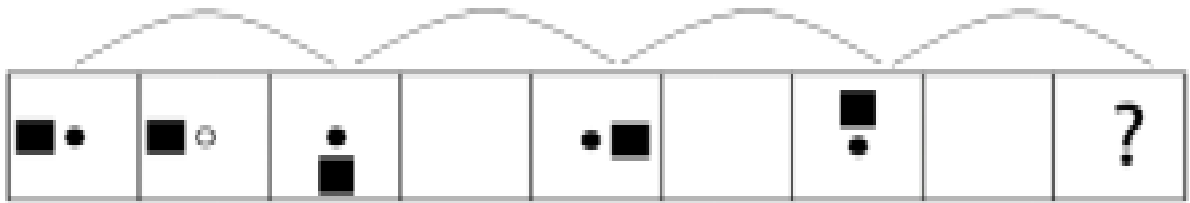


- A. 
- B. 
- C. 
- D. 
- E. 

www.riollearning.com

89.

¿Cuál es la figura que falta?



A.



B.



C.



D.

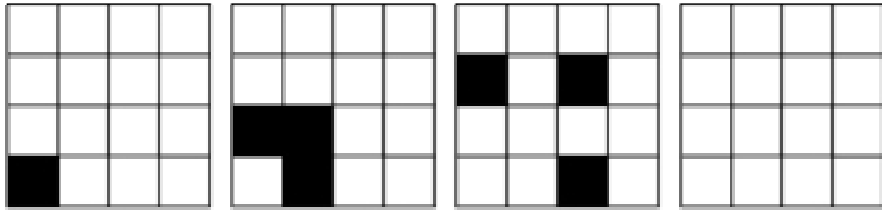


E.




90.


¿Cuál es la figura que falta?




A.




B.




C.



D.

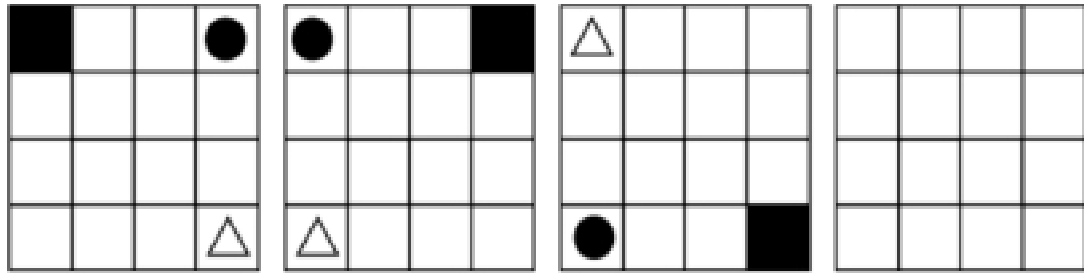


E.

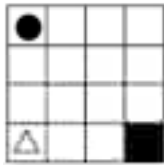


91.

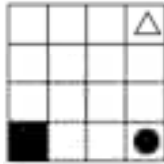
¿Cuál es la figura que falta?




A.



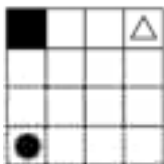
B.




C.



D.



E.



92.

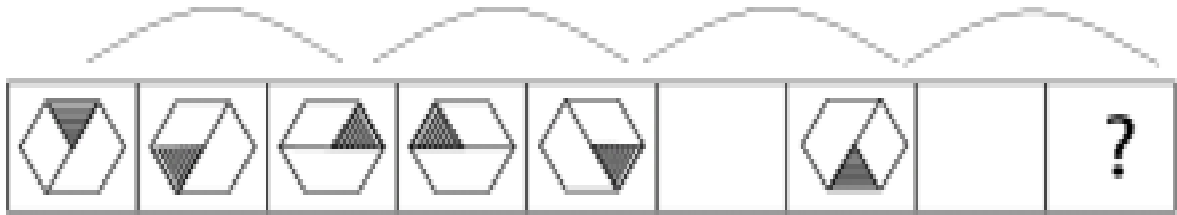
¿Cuál es la figura que falta?






- A.
- B.
- C.
- D.
- E.

www.riollearning.com

93.

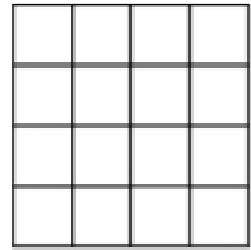
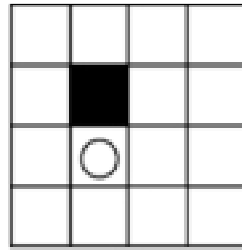


¿Cuál es la figura que falta?




- A. 
- B. 
- C. 
- D. 
- E. 

94.

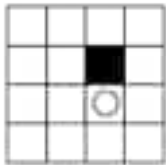
¿Cuál es la figura que falta?



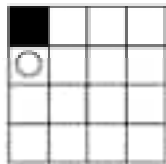
A.




B.



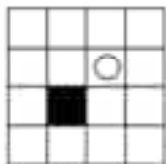
C.



D.

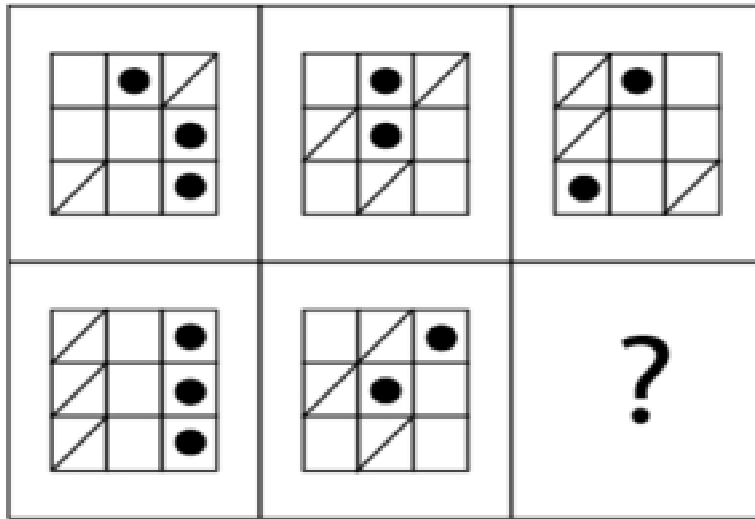


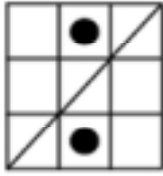
E.



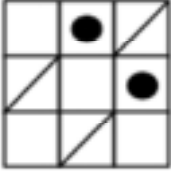
95.

¿Cuál es la figura que falta?

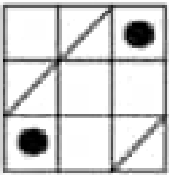




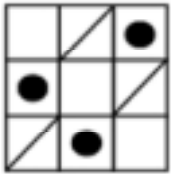
A.



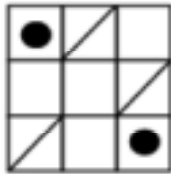
B.



C.



D.



E.


96.

¿Cuál es la figura que falta?

- A.
- B.
- C.
- D.
- E.

97.

¿Cuál es la figura que falta?



A.



B.



C.



D.












E.



98.

¿Cuál es la figura que falta?

A.




B.




C.



D.



E.



99.

¿Cuál es la figura que falta?

		?

A.



B.




C.



D.

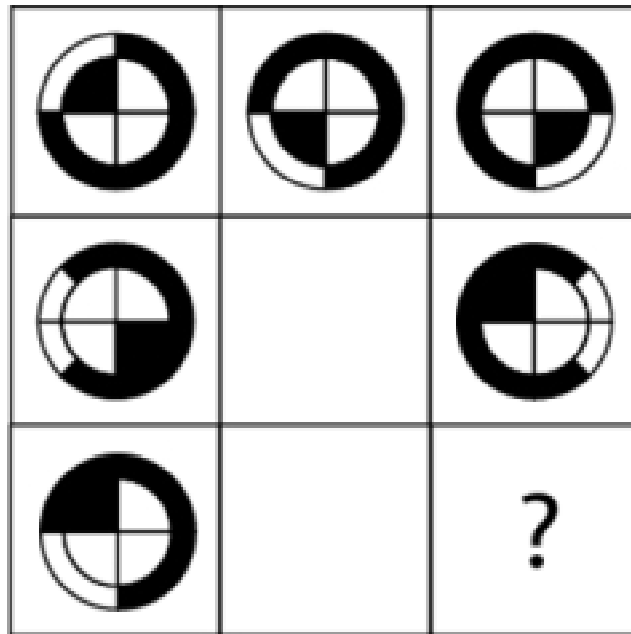


E.



100.

¿Cuál es la figura que falta?



A.



B.



C.



D.



E.



ACCESO A LA EDUCACIÓN SUPERIOR TAE100_001

Answer Section

MULTIPLE CHOICE

1. ANS: B PTS: 1
2. ANS: C PTS: 1
3. ANS: B PTS: 1
4. ANS: B PTS: 1
5. ANS: A PTS: 1
6. ANS: C PTS: 1
7. ANS: D PTS: 1
8. ANS: C PTS: 1
9. ANS: A PTS: 1
10. ANS: D PTS: 1
11. ANS: B PTS: 1
12. ANS: E PTS: 1
13. ANS: D PTS: 1
14. ANS: E PTS: 1
15. ANS: C PTS: 1
16. ANS: B PTS: 1
17. ANS: D PTS: 1
18. ANS: B PTS: 1
19. ANS: C PTS: 1
20. ANS: D PTS: 1
21. ANS: D PTS: 1
22. ANS: A PTS: 1
23. ANS: E PTS: 1
24. ANS: B PTS: 1
25. ANS: E PTS: 1
26. ANS: A PTS: 1
27. ANS: E PTS: 1
28. ANS: C PTS: 1
29. ANS: A PTS: 1
30. ANS: B PTS: 1
31. ANS: C PTS: 1
32. ANS: B PTS: 1
33. ANS: C PTS: 1
34. ANS: C PTS: 1
35. ANS: B PTS: 1
36. ANS: D PTS: 1
37. ANS: B PTS: 1
38. ANS: A PTS: 1
39. ANS: B PTS: 1
40. ANS: A PTS: 1

41.	ANS: A	PTS: 1
42.	ANS: B	PTS: 1
43.	ANS: C	PTS: 1
44.	ANS: B	PTS: 1
45.	ANS: A	PTS: 1
46.	ANS: B	PTS: 1
47.	ANS: C	PTS: 1
48.	ANS: A	PTS: 1
49.	ANS: C	PTS: 1
50.	ANS: A	PTS: 1
51.	ANS: D	PTS: 1
52.	ANS: B	PTS: 1
53.	ANS: C	PTS: 1
54.	ANS: A	PTS: 1
55.	ANS: D	PTS: 1
56.	ANS: B	PTS: 1
57.	ANS: C	PTS: 1
58.	ANS: C	PTS: 1
59.	ANS: B	PTS: 1
60.	ANS: C	PTS: 1
61.	ANS: C	PTS: 1
62.	ANS: B	PTS: 1
63.	ANS: C	PTS: 1
64.	ANS: D	PTS: 1
65.	ANS: C	PTS: 1
66.	ANS: B	PTS: 1
67.	ANS: E	PTS: 1
68.	ANS: B	PTS: 1
69.	ANS: E	PTS: 1
70.	ANS: D	PTS: 1
71.	ANS: C	PTS: 1
72.	ANS: E	PTS: 1
73.	ANS: D	PTS: 1
74.	ANS: D	PTS: 1
75.	ANS: C	PTS: 1
76.	ANS: A	PTS: 1
77.	ANS: E	PTS: 1
78.	ANS: D	PTS: 1
79.	ANS: C	PTS: 1
80.	ANS: A	PTS: 1
81.	ANS: E	PTS: 1
82.	ANS: D	PTS: 1
83.	ANS: A	PTS: 1
84.	ANS: A	PTS: 1
85.	ANS: A	PTS: 1

86.	ANS: C	PTS: 1
87.	ANS: C	PTS: 1
88.	ANS: B	PTS: 1
89.	ANS: E	PTS: 1
90.	ANS: C	PTS: 1
91.	ANS: B	PTS: 1
92.	ANS: A	PTS: 1
93.	ANS: A	PTS: 1
94.	ANS: D	PTS: 1
95.	ANS: C	PTS: 1
96.	ANS: C	PTS: 1
97.	ANS: E	PTS: 1
98.	ANS: C	PTS: 1
99.	ANS: D	PTS: 1
100.	ANS: C	PTS: 1



Forma

Test Version

--	--	--	--	--	--	--	--	--	--	--

Nombre: _____

Asignatura: _____

Fecha: _____

A

B

C

D

0 0 0 0 0 0 0 0 0

1 1 1 1 1 1 1 1 1

2 2 2 2 2 2 2 2 2

3 3 3 3 3 3 3 3 3

4 4 4 4 4 4 4 4 4

5 5 5 5 5 5 5 5 5

6 6 6 6 6 6 6 6 6

7 7 7 7 7 7 7 7 7

8 8 8 8 8 8 8 8 8

9 9 9 9 9 9 9 9 9

Cédula - Código

Ejemplo

A B C D E

Calificación

--

- Utilice lápiz para marcar la respuesta.
- Marque un círculo completo
- Borre completamente el círculo para marcar una nueva respuesta

1 A B C D E

2 A B C D E

3 A B C D E

4 A B C D E

5 A B C D E

6 A B C D E

7 A B C D E

8 A B C D E

9 A B C D E

10 A B C D E

11 A B C D E

12 A B C D E

13 A B C D E

14 A B C D E

15 A B C D E

16 A B C D E

17 A B C D E

18 A B C D E

19 A B C D E

20 A B C D E

21 A B C D E

22 A B C D E

23 A B C D E

24 A B C D E

25 A B C D E

26 A B C D E

27 A B C D E

28 A B C D E

29 A B C D E

30 A B C D E

31 A B C D E

32 A B C D E

33 A B C D E

34 A B C D E

35 A B C D E

36 A B C D E

37 A B C D E

38 A B C D E

39 A B C D E

40 A B C D E

41 A B C D E

42 A B C D E

43 A B C D E

44 A B C D E

45 A B C D E

46 A B C D E

47 A B C D E

48 A B C D E

49 A B C D E

50 A B C D E

51 A B C D E

52 A B C D E

53 A B C D E

54 A B C D E

55 A B C D E

56 A B C D E

57 A B C D E

58 A B C D E

59 A B C D E

60 A B C D E

61 A B C D E

62 A B C D E

63 A B C D E

64 A B C D E

65 A B C D E

66 A B C D E

67 A B C D E

68 A B C D E

69 A B C D E

70 A B C D E

71 A B C D E

72 A B C D E

73 A B C D E

74 A B C D E

75 A B C D E

76 A B C D E

77 A B C D E

78 A B C D E

79 A B C D E

80 A B C D E

81 A B C D E

82 A B C D E

83 A B C D E

84 A B C D E

85 A B C D E

86 A B C D E

87 A B C D E

88 A B C D E

89 A B C D E

90 A B C D E

91 A B C D E

92 A B C D E

93 A B C D E

94 A B C D E

95 A B C D E

96 A B C D E

97 A B C D E

98 A B C D E

99 A B C D E

100 A B C D E



ENLACE	DETALLE	QR
http://www.multimevi.com/	Página web MULTIMEVI, donde encontrarás noticias y recursos	
https://t.me/+Klr3YaM42_ZhZTIx	Grupo de apoyo en TELEGRAM	
https://chat.whatsapp.com/IQuCCcZjtLjIkLfgzXo68Y	<u>GRUPO DE WHATSAPP</u>	
https://whatsapp.com/channel/0029VaBB2zQHwXb5Vhn9Yw1W	Canal de noticias WhatsApp	
https://www.facebook.com/multimevi.ec/	Perfil de facebook	
https://www.facebook.com/groups/multimevi	Grupo FULL Rectivos	
https://www.tiktok.com/@multimevi	Canal de TIK TOK	
https://www.instagram.com/multimevi.ec/	Canal de Instagram	
https://twitter.com/multimevi	Red X	



Plataforma MOODLE

 www.riolearning.com

Página Web



www.multimevi.com

Redes Sociales



Procesos



ACCESO a la Educación Superior
SENESCYT

QUIERO SER MAESTRO
Ministerio de Educación